

Congratulations, you're the parents of a first grader! It seems that kindergarten flew by, but as you look at the collection of Kindergarten Memories, hopefully you can see the progress your child made this year.

They have grown physically, emotionally and spiritually, and of course academically! We are confident that they are ready to be first graders.

Attached is the summer packet. Please help your child with the directions, but allow them to do the work independently. This packet is designed to help the children bridge their skills into the next school year. This is particularly needed for the new first graders. We encourage the use of the extra pages in the SuperKid writing journal. Provide your child with a picture and ask them to write two or three sentences to tell a story. This is a skill we have worked on in class, so they should be familiar with the process. Language Arts skills must be used regularly to keep skills sharp and progressing. The SuperKids Library is a great resource, please use it regularly. Also avail yourself and your child of the public library. Included in the summer packet is a reading log. Please fill it out with all that your child reads. It, along with the summer packet, will be collected by the first grade teacher. It may seem like a lot, but please have your child do small bits at a time. It is not expected to do the entire packet at one sitting.

Have a safe, joyful and blessed summer.

Yours in Christ
Mrs. Montanez and Mrs. Vullo

Name: _____

Score: _____

Fast Facts - Addition

$5 + 5 = \underline{\quad}$

$4 + 8 = \underline{\quad}$

$8 + 0 = \underline{\quad}$

$8 + 6 = \underline{\quad}$

$3 + 6 = \underline{\quad}$

$1 + 8 = \underline{\quad}$

$1 + 3 = \underline{\quad}$

$5 + 2 = \underline{\quad}$

$6 + 3 = \underline{\quad}$

$1 + 7 = \underline{\quad}$

$9 + 2 = \underline{\quad}$

$8 + 1 = \underline{\quad}$

$4 + 5 = \underline{\quad}$

$5 + 3 = \underline{\quad}$

$4 + 0 = \underline{\quad}$

$5 + 8 = \underline{\quad}$

$1 + 4 = \underline{\quad}$

$6 + 5 = \underline{\quad}$

$6 + 4 = \underline{\quad}$

$6 + 2 = \underline{\quad}$

$6 + 1 = \underline{\quad}$

$1 + 1 = \underline{\quad}$

$2 + 5 = \underline{\quad}$

$5 + 4 = \underline{\quad}$

$4 + 3 = \underline{\quad}$

$2 + 3 = \underline{\quad}$

$1 + 2 = \underline{\quad}$

$3 + 1 = \underline{\quad}$


$7 + 1 = \underline{\quad}$


$1 + 5 = \underline{\quad}$

Name _____

Slow Walker

Connect the dots from a to z. Color.





Name: _____

Score: _____

Subtraction Facts Challenge

$$5 - 4 = \underline{\quad}$$

$$4 - 3 = \underline{\quad}$$

$$2 - 1 = \underline{\quad}$$

$$2 - 2 = \underline{\quad}$$

$$3 - 3 = \underline{\quad}$$

$$4 - 2 = \underline{\quad}$$

$$3 - 2 = \underline{\quad}$$

$$5 - 3 = \underline{\quad}$$

$$4 - 4 = \underline{\quad}$$

$$4 - 1 = \underline{\quad}$$

$$1 - 1 = \underline{\quad}$$

$$5 - 1 = \underline{\quad}$$

Seashells and Sand Castles

Read.



At the Beach



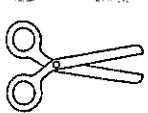
Cat and Dog go to the beach. Cat and Dog play in the



ocean. Dog helps Cat find seashells. Then Cat helps



Dog build a sand castle.




Cut.

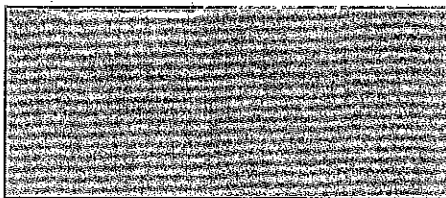


Glue to finish the sentence.


1. First, they play in the




2. Next, they find



3. Last, they build a



seashells



ocean




sand castle

In the Bag

Add. Use counters to help you.

 Write the answer.




counters can be anything...
paper clips, marbles, grapes, goldfish ☺



1. Count by 1 from 1 to 100

		3					8	9	10
11		13	14		16			19	
							28		
							48		50
61									70
	72								
		83	84	85					
	92			95					



Name: _____

Score: _____

Subtraction Facts Challenge

$10 - 1 = \underline{\quad}$

$10 - 9 = \underline{\quad}$

$7 - 2 = \underline{\quad}$

$10 - 6 = \underline{\quad}$

$10 - 3 = \underline{\quad}$

$9 - 3 = \underline{\quad}$

$3 - 2 = \underline{\quad}$

$10 - 7 = \underline{\quad}$

$10 - 8 = \underline{\quad}$

$2 - 2 = \underline{\quad}$

$10 - 10 = \underline{\quad}$

$7 - 4 = \underline{\quad}$

Name _____

CIRCLE & SORT

1. The pot is hot.
2. I hop on a cot.
3. I got a mop.
4. I pop the top.

-op words

1. _____

2. _____

3. _____

4. _____

-ot words

1. _____

2. _____

3. _____

4. _____

Name: _____

Score: _____

Fast Facts - Addition

$$\begin{array}{r} 2 \\ + 1 \\ \hline \end{array}$$

$$\begin{array}{r} 5 \\ + 3 \\ \hline \end{array}$$

$$\begin{array}{r} 6 \\ + 7 \\ \hline \end{array}$$

$$\begin{array}{r} 2 \\ + 6 \\ \hline \end{array}$$

$$\begin{array}{r} 5 \\ + 5 \\ \hline \end{array}$$

$$\begin{array}{r} 8 \\ + 1 \\ \hline \end{array}$$

$$\begin{array}{r} 5 \\ + 8 \\ \hline \end{array}$$

$$\begin{array}{r} 6 \\ + 3 \\ \hline \end{array}$$

$$\begin{array}{r} 4 \\ + 2 \\ \hline \end{array}$$

$$\begin{array}{r} 6 \\ + 2 \\ \hline \end{array}$$

$$\begin{array}{r} 3 \\ + 5 \\ \hline \end{array}$$

$$\begin{array}{r} 3 \\ + 2 \\ \hline \end{array}$$

Name _____

CIRCLE & SORT

1. The bug is in a jug.
2. I run in the sun.
3. I tug on the rug.
4. I spun and it is fun!

-un words

1.	_____

2.	_____

3.	_____

4.	_____


-ug words

1.	_____

2.	_____

3.	_____

4.	_____



Name: _____

Score: _____

Subtraction Facts Challenge

$$\begin{array}{r} 5 \\ - 2 \\ \hline \end{array}$$

$$\begin{array}{r} 5 \\ - 3 \\ \hline \end{array}$$

$$\begin{array}{r} 2 \\ - 1 \\ \hline \end{array}$$

$$\begin{array}{r} 5 \\ - 4 \\ \hline \end{array}$$

$$\begin{array}{r} 2 \\ - 2 \\ \hline \end{array}$$

$$\begin{array}{r} 5 \\ - 5 \\ \hline \end{array}$$

$$\begin{array}{r} 5 \\ - 0 \\ \hline \end{array}$$

$$\begin{array}{r} 1 \\ - 1 \\ \hline \end{array}$$

$$\begin{array}{r} 3 \\ - 1 \\ \hline \end{array}$$

$$\begin{array}{r} 5 \\ - 2 \\ \hline \end{array}$$

$$\begin{array}{r} 5 \\ - 1 \\ \hline \end{array}$$

$$\begin{array}{r} 4 \\ - 3 \\ \hline \end{array}$$

Name _____

CIRCLE & SORT

1. Kim bit the ham.
2. I sit on the rim.
3. Tim can hit the bag.
4. Jim has a kit.

-im words

-it words

Name: _____

Score: _____

Fast Facts - Addition

$7 + 6 = \underline{\quad}$

$3 + 7 = \underline{\quad}$

$3 + 3 = \underline{\quad}$

$0 + 5 = \underline{\quad}$

$1 + 5 = \underline{\quad}$

$8 + 4 = \underline{\quad}$

$7 + 9 = \underline{\quad}$

$6 + 5 = \underline{\quad}$

$0 + 3 = \underline{\quad}$

$2 + 5 = \underline{\quad}$

$2 + 6 = \underline{\quad}$

$8 + 3 = \underline{\quad}$

$4 + 6 = \underline{\quad}$

$4 + 2 = \underline{\quad}$

$5 + 1 = \underline{\quad}$

$3 + 5 = \underline{\quad}$

$3 + 4 = \underline{\quad}$

$4 + 4 = \underline{\quad}$

$4 + 8 = \underline{\quad}$

$2 + 8 = \underline{\quad}$

$8 + 8 = \underline{\quad}$

$3 + 6 = \underline{\quad}$

$2 + 2 = \underline{\quad}$

$4 + 5 = \underline{\quad}$

$8 + 1 = \underline{\quad}$

$1 + 8 = \underline{\quad}$

$0 + 6 = \underline{\quad}$

$5 + 2 = \underline{\quad}$

$7 + 8 = \underline{\quad}$

$4 + 3 = \underline{\quad}$

Name _____

CIRCLE & SORT

1. The bed is red.
2. I fed the hen.
3. Jen has a pen.
4. Ted is in the den.

-ed words

1. _____

2. _____

3. _____

4. _____

-en words

1. _____

2. _____

3. _____

4. _____

Name: _____

Score: _____

Fast Facts - Addition

$$\begin{array}{r} 3 \\ + 9 \\ \hline \end{array}$$

$$\begin{array}{r} 5 \\ + 3 \\ \hline \end{array}$$

$$\begin{array}{r} 2 \\ + 3 \\ \hline \end{array}$$

$$\begin{array}{r} 3 \\ + 2 \\ \hline \end{array}$$

$$\begin{array}{r} 2 \\ + 7 \\ \hline \end{array}$$

$$\begin{array}{r} 1 \\ + 7 \\ \hline \end{array}$$

$$\begin{array}{r} 5 \\ + 6 \\ \hline \end{array}$$

$$\begin{array}{r} 6 \\ + 7 \\ \hline \end{array}$$

$$\begin{array}{r} 8 \\ + 3 \\ \hline \end{array}$$

$$\begin{array}{r} 4 \\ + 7 \\ \hline \end{array}$$

$$\begin{array}{r} 3 \\ + 5 \\ \hline \end{array}$$

$$\begin{array}{r} 4 \\ + 9 \\ \hline \end{array}$$

Name _____

CIRCLE & SORT

1. Pam had the jam.
2. I tap on Sam.
3. The ram has a nap.
4. The map is in my lap.


-am words

-ap words

Name _____

Air Ball!

Add. Use counters to help you.

 Write the answer.

$5 + 3 = \underline{\quad}$

$5 + 1 = \underline{\quad}$

$10 + 0 = \underline{\quad}$


$4 + 3 = \underline{\quad}$

$7 + 2 = \underline{\quad}$

$4 + 5 = \underline{\quad}$

$1 + 9 = \underline{\quad}$

$2 + 8 = \underline{\quad}$



Name _____

CIRCLE & SORT

1. The rat is on a mat.
2. Dad had a map.
3. The cat is mad.
4. The bat is sad.

-at words

-ad words



Name: _____

Score: _____

Subtraction Facts Challenge

$$\begin{array}{r} 10 \\ - 2 \\ \hline \end{array}$$

$$\begin{array}{r} 10 \\ - 6 \\ \hline \end{array}$$

$$\begin{array}{r} 10 \\ - 5 \\ \hline \end{array}$$

$$\begin{array}{r} 3 \\ - 3 \\ \hline \end{array}$$

$$\begin{array}{r} 10 \\ - 9 \\ \hline \end{array}$$

$$\begin{array}{r} 5 \\ - 2 \\ \hline \end{array}$$

$$\begin{array}{r} 8 \\ - 5 \\ \hline \end{array}$$

$$\begin{array}{r} 10 \\ - 7 \\ \hline \end{array}$$

$$\begin{array}{r} 2 \\ - 2 \\ \hline \end{array}$$

$$\begin{array}{r} 10 \\ - 4 \\ \hline \end{array}$$

$$\begin{array}{r} 10 \\ - 3 \\ \hline \end{array}$$


$$\begin{array}{r} 7 \\ - 2 \\ \hline \end{array}$$



At the Snack Shack


Read.

Draw a picture.



Solve.





A. Lex buys 14  muffins.
He gives 8  muffins away.
How many muffins are left?





_____ muffins

B. Lee buys 6  juice boxes.
Lynn buys 7  juice boxes.
How many juice boxes do they buy in all?


_____ juice boxes

C. Lori eats 9  blueberries.
She eats 4  strawberries.
How many berries does she eat in all?



_____ berries

D. Li buys 13  ice pops.
8  ice pops melt.
How many ice pops are left?

_____ ice pops

E. Lisa buys 11  pizza slices.
She and her friends eat 5 slices.
How many slices are left?

_____ slices

F. Leroy buys 5 red  apples.
He buys 5 green  apples.
How many apples does he buy in all?

_____ apples


Bonus Box: On the back of this page, write and solve a story problem about 10 hamburgers. Draw a picture to go with your problem.


Please write numbers 1-20 in order.





A series of horizontal lines for writing, consisting of 10 rows. Each row is defined by two parallel lines, with a dashed midline in the center of each row to guide letter height. The lines are evenly spaced and extend across the width of the page.


Name _____

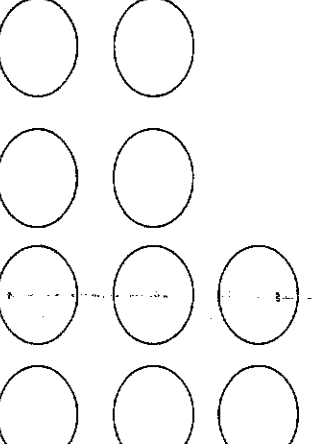

$\underline{\quad} + \underline{\quad} = 10$



$\underline{\quad} + \underline{\quad} = 10$



$\underline{\quad} + \underline{\quad} = 10$



$\underline{\quad} + \underline{\quad} = 10$



$\underline{\quad} + \underline{\quad} = 10$



$\underline{\quad} + \underline{\quad} = 10$



$\underline{\quad} + \underline{\quad} = 10$


$\underline{\quad} + \underline{\quad} = 10$


$\underline{\quad} + \underline{\quad} = 10$

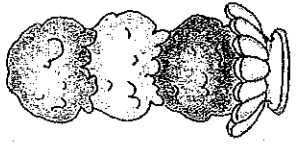

$\underline{\quad} + \underline{\quad} = 10$


$\underline{\quad} + \underline{\quad} = 10$


$\underline{\quad} + \underline{\quad} = 10$

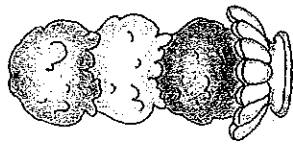
Sums of 10

Please write your first name seven (7) times



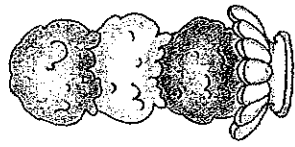
Handwriting practice lines consisting of seven sets of horizontal lines. Each set includes a solid top line, a dashed midline, and a solid bottom line, providing a guide for letter height and placement.

Please finish this sentence and try to write one more sentence.



This summer, I

Please finish this sentence and try to write one more sentence



I had fun at